

CSE 20

DISCRETE MATH

SPRING 2016

<http://cseweb.ucsd.edu/classes/sp16/cse20-ac/>

Today's learning goals

- Convert between positive integers written in any base
- Relate algorithms for integer operations to bitwise boolean operations
- Correctly use XOR and bit shifts

About you

CENTR101: CA

PCYNH109: AB

To change your remote frequency

1. Press and hold power button until flashing
2. Enter two-letter code
3. Checkmark / green light indicates success

How many people were in your group for HW1?

- A. I worked alone.
- B. 2
- C. 3
- D. I joined this class late and didn't submit HW1.

Recall: Base expansion

Rosen p. 246

Notation: for positive integer n

Write

$$(a_k a_{k-1} \dots a_1 a_0)_b$$

when

$$n = a_k b^k + a_{k-1} b^{k-1} + \dots + a_1 b + a_0$$

Base b expansion of n

What's the base 2 expansion of 42?

- A. 111111
- B. 100001
- C. 101010
- D. 110011
- E. None of the above

What's the base 2 expansion of 42?

- A. 111111
- B. 100001
- C. 101010
- D. 110011
- E. None of the above



What's the **biggest** integer value whose binary representation has 4 bits?

A. $2^4 = 16$

B. $2^3 = 8$

C. 4

D. 1000

E. None of the above

What's the **smallest** integer value whose binary representation has 4 bits?

- A. 0
- B. 1
- C. 8
- D. 1000
- E. None of the above

Fixed width "binary expansions" with 4 bits

$$(0000)_2 = 0$$

$$(0001)_2 = 1$$

$$(0010)_2 = 2$$

...

$$(1110)_2 = 14$$

$$(1111)_2 = 15$$



What about negative numbers?

From HW2... Two's complement

Use n bits to represent integers in the range $[-2^{n-1}, 2^{n-1} - 1]$

From HW2... Two's complement

Use n bits to represent integers in the range $[-2^{n-1}, 2^{n-1} - 1]$

e.g. for 4 bits the range is -8, -7, -6, ... , 5, 6, 7.

0000 → 0

$n-1$ rather than n
because use 1 bit
to signal positive
vs. negative

From HW2... Two's complement

Use n bits to represent integers in the range $[-2^{n-1}, 2^{n-1} - 1]$

e.g. for 4 bits the range is -8, -7, -6, ... , 5, 6, 7.

..

0010 → 2

0001 → 1

0000 → 0

From HW2... Two's complement

Use n bits to represent integers in the range $[-2^{n-1}, 2^{n-1} - 1]$

e.g. for 4 bits the range is -8, -7, -6, ... , 5, 6, 7.

..
0010 → 2
0001 → 1
0000 → 0

Use leading 0 to indicate positive.

From HW2... Two's complement

Use n bits to represent integers in the range $[-2^{n-1}, 2^{n-1} - 1]$

e.g. for 4 bits the range is -8, -7, -6, ... , 5, 6, 7.


..

0010 → 2

0001 → 1

0000 → 0

**For negative integers x
the leftmost bit is 1 and the remaining
 $n-1$ bits are the binary expansion of
 $2^{n-1} - |x|$**



From HW2... Two's complement

Use n bits to represent integers in the range $[-2^{n-1}, 2^{n-1} - 1]$

e.g. for 4 bits the range is -8, -7, -6, ... , 5, 6, 7.

..

0010 → 2

0001 → 1

0000 → 0

**For negative integers x
the leftmost bit is 1 and the remaining
 $n-1$ bits are the binary expansion of
 $2^{n-1} - |x|$**

What is the 4 bit two's complement representation of -1?

A. 0001

D. 0111

B. 1001

E. None of the above

C. 1111

From HW2... Two's complement

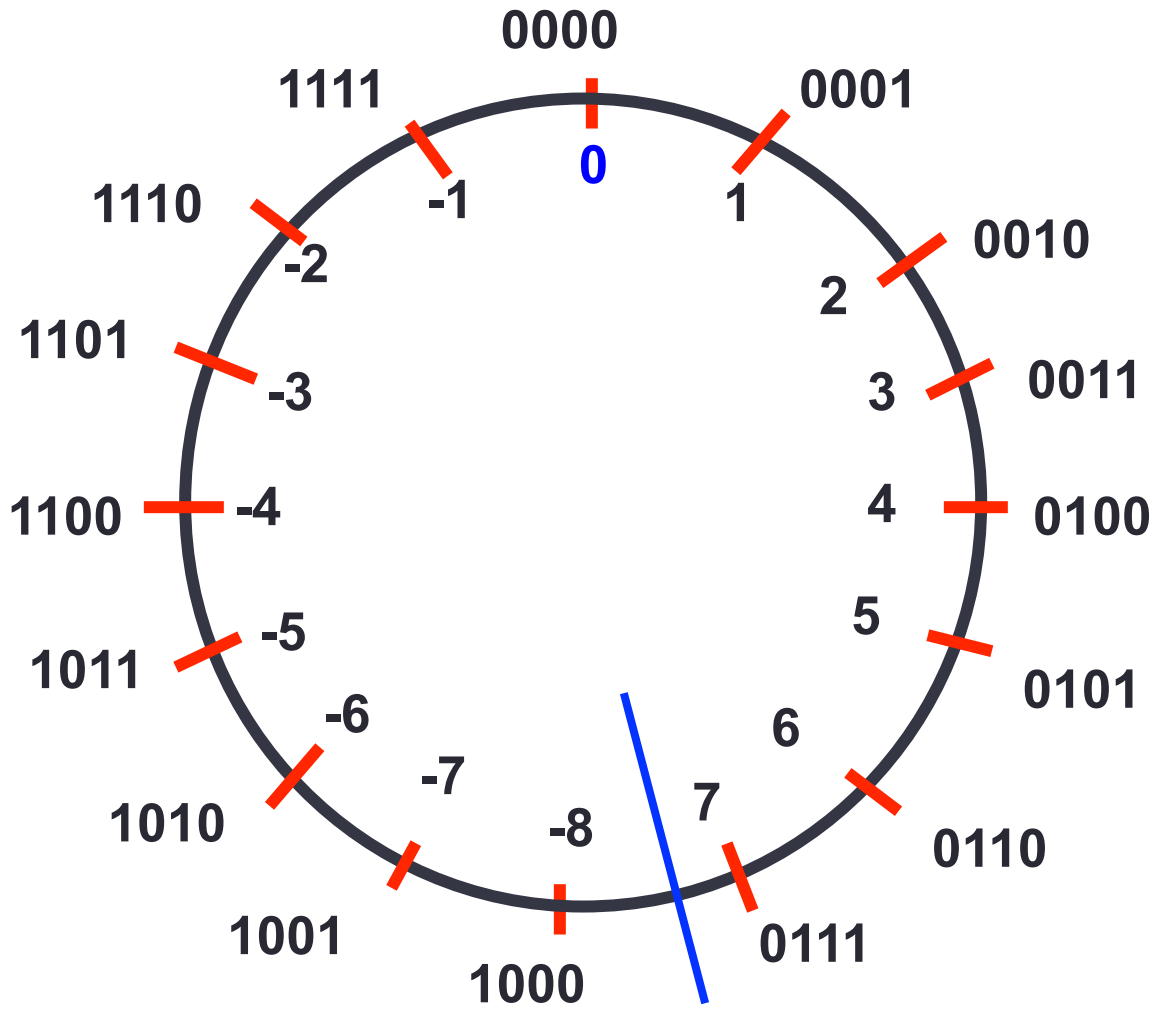
Use n bits to represent integers in the range $[-2^{n-1}, 2^{n-1} - 1]$

e.g. for 4 bits the range is -8, -7, -6, ..., 5, 6, 7.

..
0010 → 2
0001 → 1
0000 → 0
1111 → -1
1110 → -2
...

For positive integers x
the leftmost bit is 0 and the remaining $n-1$ bits are the binary expansion of x

For negative integers x
the leftmost bit is 1 and the remaining $n-1$ bits are the binary expansion of $2^{n-1} - |x|$



Adding

What's the result of adding 2 and -2?

..

0010 → 2

0001 → 1

0000 → 0

1111 → -1

1110 → -2

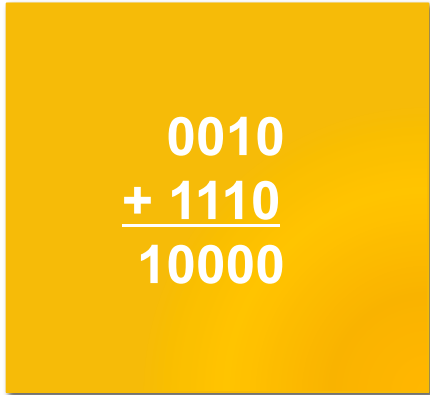
...

Adding

What's the result of adding 2 and -2?

Should equal 0

..
0010 → 2
0001 → 1
0000 → 0
1111 → -1
1110 → -2
...



0010
+ 1110

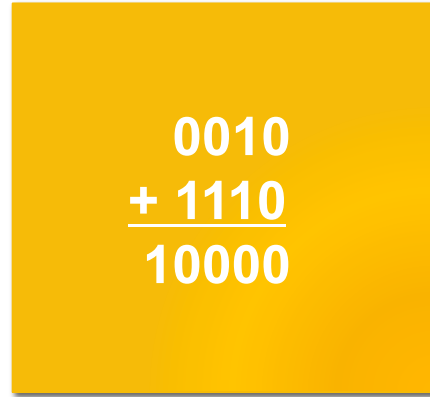
10000

Adding

Should equal 0

What's the result of adding 2 and -2?

..
0010 → 2
0001 → 1
0000 → 0
1111 → -1
1110 → -2
...

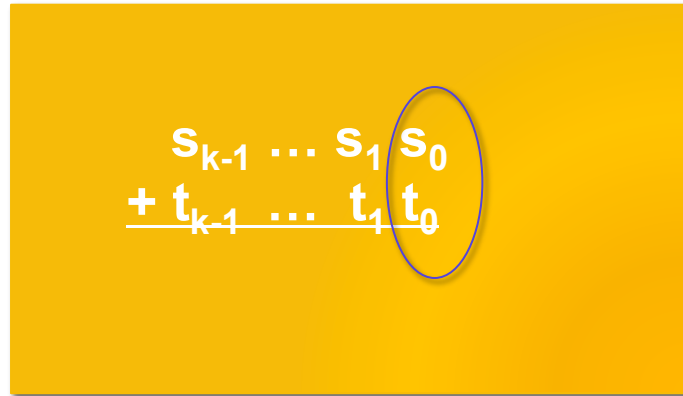

$$\begin{array}{r} 0010 \\ + 1110 \\ \hline 10000 \end{array}$$

Key: to zero out bits, each column needs to cancel.

Arithmetic + Representations

Rosen p. 251,826

In base b ,



A diagram illustrating the addition of two numbers in base b . The numbers are written as $s_{k-1} \dots s_1 s_0$ and $+ t_{k-1} \dots t_1 t_0$. A horizontal line is drawn under the digits $t_{k-1} \dots t_1 t_0$. The digit s_0 is circled in blue, and a blue arrow points from the bottom of the circle to the digit t_0 , indicating a carry from the least significant digit.

$$\begin{array}{r} s_{k-1} \dots s_1 s_0 \\ + t_{k-1} \dots t_1 t_0 \\ \hline \end{array}$$

Basic operations: one symbol addition, carry

Arithmetic + Representations

Rosen p. 251,826

For binary

	0	1
0	0	1
1	1	0

Arithmetic + Representations

Rosen p. 251,826

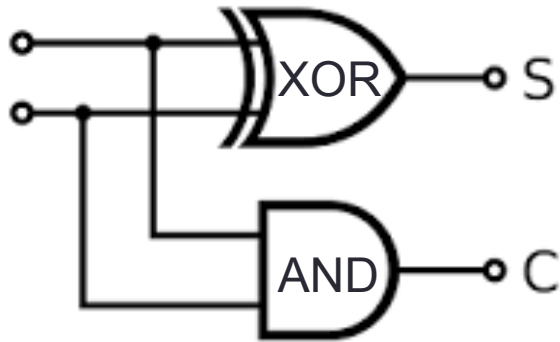
Alternatively,

Input		Output	
x	y	Sum	Carry
0	0	0	0
0	1	1	0
1	0	1	0
1	1	0	1

Arithmetic + Representations

Rosen p. 251,826

Alternatively,



Input		Output	
x	y	Sum	Carry
0	0	0	0
0	1	1	0
1	0	1	0
1	1	0	1

Half adder logic circuit

Computer bit operations

Rosen p. 11

x	y	$x \vee y$ x OR y	$x \wedge y$ x AND y	$x \oplus y$ x XOR y
0	0	0	0	0
0	1	1	0	1
1	0	1	0	1
1	1	1	1	0

"x OR y is 1 if at least one of x or y is 1"

"x AND y is 1 if both x and y are 1"

"x XOR y is 1 if exactly one of x and y is 1"

Computer bit operations

Rosen p. 11

x	y	$x \vee y$ x OR y	$x \wedge y$ x AND y	$x \oplus y$ x XOR y
0	0	0	0	0
0	1	1	0	1
1	0	1	0	1
1	1	1	1	0

What is the **bitwise** AND of the strings 0011 and 0101?

- A. 0001
- B. 0111
- C. 0010
- D. 0100
- E. None of the above

Computer bit operations

Rosen p. 11

x	y	$x \vee y$ x OR y	$x \wedge y$ x AND y	$x \oplus y$ x XOR y
0	0	0	0	0
0	1	1	0	1
1	0	1	0	1
1	1	1	1	0

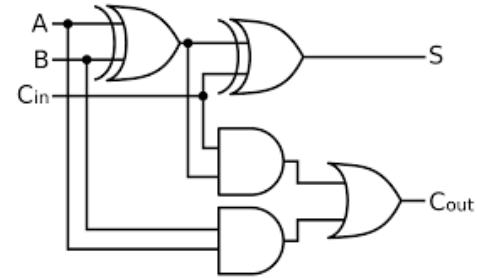
What is the **bitwise** XOR of the strings 0011 and 0101?

- A. 0110
- B. 0000
- C. 0111
- D. 0100
- E. None of the above

Logic

- Use gates and circuits to express arithmetic.
- Precisely express theorems and invariant statements.
- Make valid arguments to prove theorems.

Rosen Section 1.1



Definitions

Rosen p. 2-4

- **Proposition:** declarative sentence that is T or F (not both)
- **Propositional variable:** variables that represent propositions.
- **Compound proposition:** new propositions formed from existing propositions using logical operators.
- **Truth table:** table with 1 row for each of the possible combinations of truth values of the input and an additional column that shows the truth value of the result of the operation corresponding to a particular row.

Truth tables

How many rows are in the truth table for $p \vee q$, the disjunction of p and q ?

A. 0110

D. 0100

B. 0000

E. None of the above

C. 0111

Truth tables

- Specify logical operator by truth table.
- Can use truth table to compute value of compound variable.

- *Next time: how to prove two tables are equivalent?*

Reminders

- Homework 2 due Friday
 - Integer representations
 - Algorithms
- Office hours